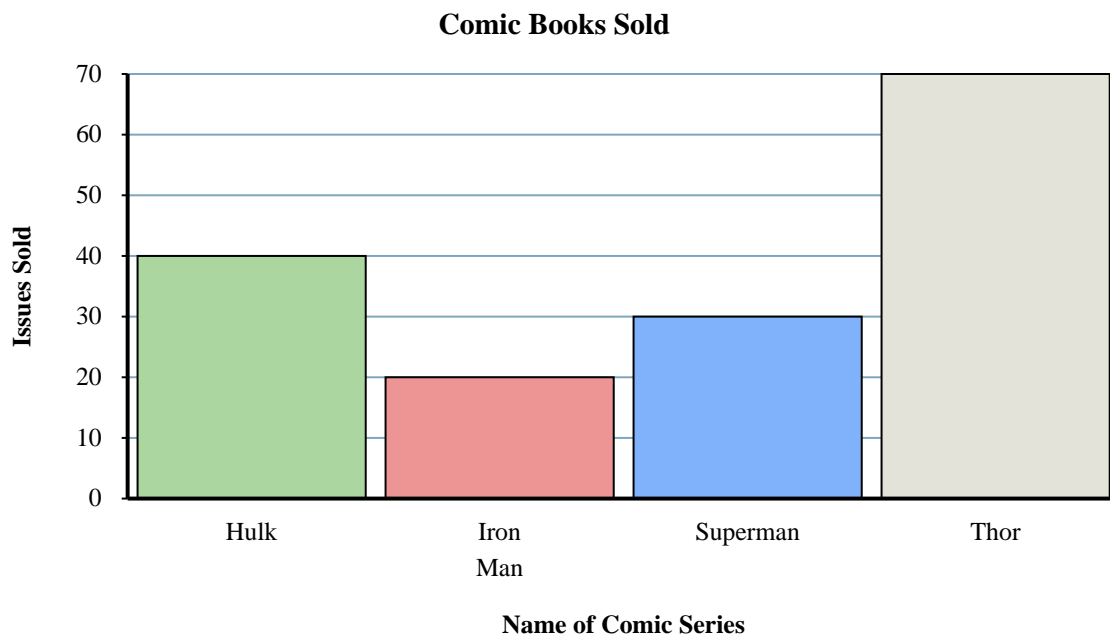
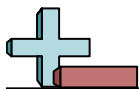


A comic store was tracking comic books sold. They recorded their sales in the bar graph below. Use their graph to answer the questions.

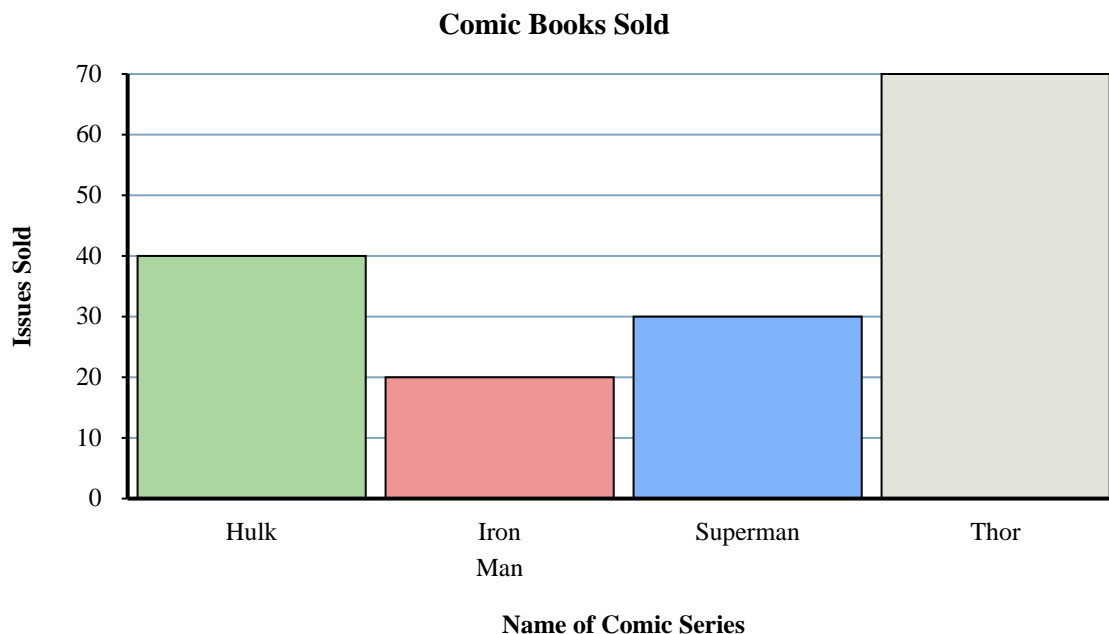
**Answers**

1. _____
2. _____
3. _____
4. _____
5. _____
6. _____
7. _____
8. _____
9. _____
10. _____

- 1) How many issues of Iron Man were sold?
- 2) Which comic series sold the fewest issues?
- 3) Which sold fewer, issues of Iron Man or issues of Hulk?
- 4) How many more issues of Thor were sold than issues of Hulk?
- 5) Which comic series sold the most issues?
- 6) Which comic series sold more, Iron Man or Superman?
- 7) What is the total number of issues sold for all the comics?
- 8) What is the difference in the number of Thor issues sold and the number of Superman issues sold?
- 9) What is the combined number of Thor and Iron Man issues sold?
- 10) How many fewer issues of Superman were sold than issues of Hulk?



A comic store was tracking comic books sold. They recorded their sales in the bar graph below. Use their graph to answer the questions.



- 1) How many issues of Iron Man were sold?
- 2) Which comic series sold the fewest issues?
- 3) Which sold fewer, issues of Iron Man or issues of Hulk?
- 4) How many more issues of Thor were sold than issues of Hulk?
- 5) Which comic series sold the most issues?
- 6) Which comic series sold more, Iron Man or Superman?
- 7) What is the total number of issues sold for all the comics?
- 8) What is the difference in the number of Thor issues sold and the number of Superman issues sold?
- 9) What is the combined number of Thor and Iron Man issues sold?
- 10) How many fewer issues of Superman were sold than issues of Hulk?

Answers

1. **20**
2. **Iron Man**
3. **Iron Man**
4. **30**
5. **Thor**
6. **Superman**
7. **160**
8. **40**
9. **90**
10. **10**